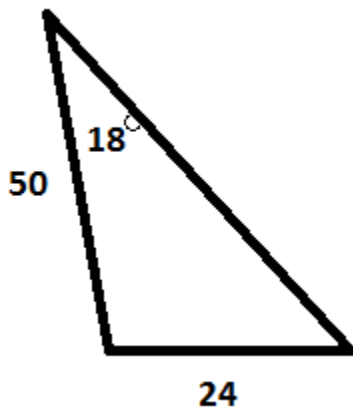
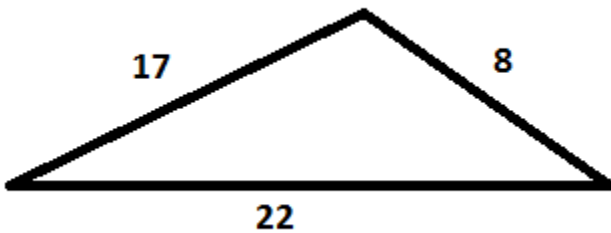
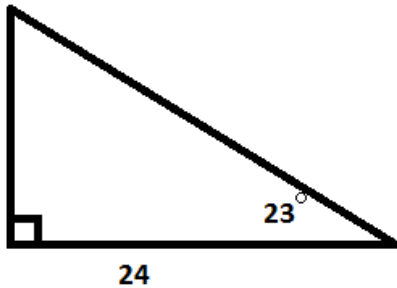
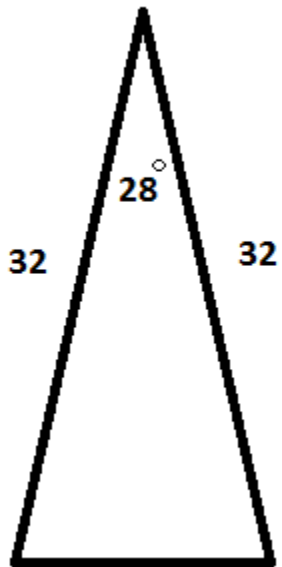
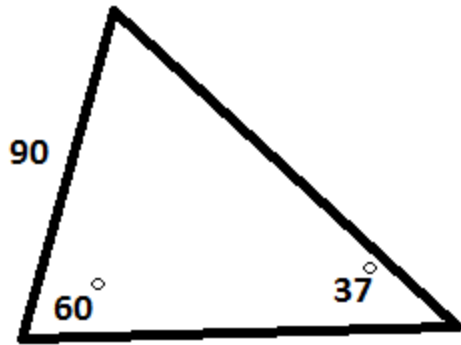


## Review Activity 2: Solving Triangles

Solve each of the following triangles. That is, find all of the sides and angles that aren't given to you. Round to the nearest tenth if necessary. *Don't assume that the pictures are drawn to scale—only trust what's been labeled.* This is worth 30 points (2 points per side or angle, and you'll earn 1 if you make a small math error or have rounding issues). **You must show your work to receive credit.**



You may assume that the bottom left angle is indeed greater than 90 degrees, so that there is only one possible solution.



**Hint:** If two sides are the same, the angles opposite them are the same!